

# MATHEMATICS - Sample questions

## Question 1 – Basic Mathematics (+)

The greatest value of the function  $f(x) = -\frac{x^4}{4} + \frac{x^3}{3} + 3x^2 - 15$  over  $\mathbb{R}$  is:

- (a)  $-\frac{29}{3}$
- (b)  $-\frac{1}{4}$
- (c)  $-15$
- (d)  $\frac{3}{4}$
- (e)  $\frac{17}{12}$

## Question 2 – Basic Mathematics (+)

Let  $A = \int_0^1 (x-3x^2) dx + \int_0^{\frac{\pi}{3}} (\cos x + \sin x) dx$ . Then  $A =$

- (a)  $\frac{\sqrt{3}}{2}$
- (b)  $\frac{\sqrt{3}}{2} - 1$
- (c)  $\frac{1}{2}$
- (d)  $1 + \frac{\sqrt{2}}{2}$
- (e)  $-\frac{1}{2} - \frac{\pi}{3}$

## Question 3 – Basic Mathematics (+)

The inverse of the matrix  $\begin{pmatrix} 4 & 7 \\ 3 & 5 \end{pmatrix}$  is:

- (a)  $\begin{pmatrix} \frac{1}{4} & \frac{1}{7} \\ \frac{1}{3} & \frac{1}{5} \end{pmatrix}$
- (b)  $\begin{pmatrix} 5 & -7 \\ -3 & 4 \end{pmatrix}$
- (c)  $\begin{pmatrix} -5 & 7 \\ 3 & -4 \end{pmatrix}$
- (d) the inverse does not exist
- (e) there are infinitely many inverses

## Question 4 – Basic Mathematics (+)

Let  $f(x) = \sqrt{x^2 + x} + 3x - 1$ . Then, as  $x \rightarrow +\infty$ ,  $f(x) =$

- (a)  $3x - 1 + o(1)$
- (b)  $3x + 2 + o(1)$
- (c)  $4x - 1 + o(1)$
- (d)  $4x - \frac{1}{2} + o(1)$
- (e)  $4x + o(1)$

## Question 5 – Basic Mathematics (+)

Assume that in a class, 60% of the students are women, 20% of the students are playing music, and among the musicians there are 50% of women. If you take a student at random, what is the probability that it is a woman or a musician (or a musician woman)?

- (a) 10%
- (b) 30%
- (c) 50%
- (d) 70%
- (e) 80%

## Question 6 – Basic Mathematics (++)

Let  $\mathcal{C}$  be the graph of the function

$$f(x) = x^2 - 1$$

and let  $O$  denote the point  $(0, 0)$ .

Then  $\inf_{M \in \mathcal{C}} OM =$

- (a)  $\sqrt{2}$
- (b) 1
- (c)  $\sqrt{3}/2$
- (d)  $\sqrt{5}/8$
- (e)  $1/\sqrt{2}$

## Question 7 – Analysis (+)

Let  $y$  denote the solution of

$$\begin{cases} y'' + y & = 0 \\ y(0) = 2, y'(0) & = -1 \end{cases}$$

where  $y' = dy/dx$ ,  $y'' = d^2y/dx^2$ . Then  $y(\pi/2) =$

- (a)  $-1$
- (b) 0
- (c) 1
- (d) 2
- (e) there is no such  $y$ .

**Question 8 – Analysis (+)**

Let  $S = \sum_{n=1}^{\infty} \frac{1}{(n+3)(n+4)}$ . Then  $S =$

- (a)  $\frac{1}{8}$
- (b)  $\frac{1}{4}$
- (c) 1
- (d)  $\frac{\pi^2}{6}$
- (e)  $+\infty$

**Question 9 – Algebra (++)**

The matrix

$$\begin{pmatrix} -1 & 2 & 0 \\ 2 & 2 & -3 \\ -2 & 2 & 1 \end{pmatrix}$$

is

- (a) invertible and diagonalizable on  $\mathbb{R}$
- (b) invertible but not diagonalizable on  $\mathbb{R}$
- (c) not invertible and not diagonalizable on  $\mathbb{R}$
- (d) not invertible but diagonalizable on  $\mathbb{R}$
- (e) not invertible and not triangularizable on  $\mathbb{R}$

**Question 10 – Algebra (++)**

Let the sequence  $(u_n)_{n \geq 0}$  of real numbers be defined by the relations  $u_0 = 2$ ,  $u_1 = 3$ , and

$$u_{n+2} = \frac{1}{6}u_{n+1} + \frac{1}{6}u_n \quad \forall n \geq 0.$$

Then  $\lim_{n \rightarrow +\infty} u_n =$

- (a)  $\frac{13}{5}$
- (b) 0
- (c)  $\frac{2}{3}$
- (d)  $+\infty$
- (e) the limit does not exist

# COMPUTER SCIENCE - Sample questions

## Question 1 – Computer science (+)

Let  $T$  be an array of zeros and ones of size  $n$ . Consider the following pseudo-code:

```
r = 0
s = 0
for i = 1 to n do
| r = T[i]*(r + T[i])
| if s < r then s = r
endfor
```

What is the value of  $s$  at the end of the for loop?

- (a) the number of ones in array  $T$
- (b) the length of the first run of consecutive ones in array  $T$
- (c) the length of the last run of consecutive ones in array  $T$
- (d) the minimal length of a run of consecutive ones in array  $T$
- (e) the maximal length of a run of consecutive ones in array  $T$

What is the weight of a minimum spanning tree for  $G$ ?

- (a) 11
- (b) 19
- (c) 29
- (d) 30
- (e) 42

## Question 2 – Computer science (++)

In our regular expression grammar:

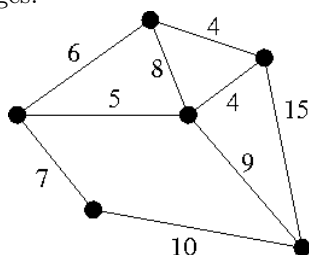
- characters surrounded by a pair of parentheses to form a group ;
- if needed, the number of occurrences of the immediately preceding character or group is indicated using ? (0 or 1), \* (0 or more), or + (1 or more).

To which one of those regular expressions corresponds the string  $aaabbababcccaab$  ?

- (a)  $(ab)?a+b(ba)+bc+b*a*b$
- (b)  $aba+b(ba)+bc+b*a*b$
- (c)  $(ab)?a+b(ba)+bc+b+a*b$
- (d)  $(ab)?a+b(ba)c+bc+b*a*b$

## Question 3 – Computer science (+++)

Consider the following non oriented graph  $G$  with weighted edges:



# PHYSICS - Sample questions

## Question 1 – Mechanics (+)

Two astronauts are in orbit, far away from the earth and from any other planets or satellites, therefore there is no gravitational force acting on them. They are at rest, close to each other. Suddenly, the astronaut  $A$ , which have a mass  $m_A$ , pushes the astronaut  $B$ , which has a mass  $m_B$ . After that action, the astronauts  $B$  start moving with a speed vector  $\vec{v}_B$ . What will be the speed of the astronaut  $A$ ?

- (a)  $\vec{v}_A = \frac{m_A}{m_B} \vec{v}_B$
- (b)  $\vec{v}_A = -\frac{m_A}{m_B} \vec{v}_B$
- (c)  $\vec{v}_A = -\vec{v}_B$
- (d)  $\vec{v}_A = -\frac{m_B}{m_A} \vec{v}_B$
- (e)  $\vec{v}_A = 0$

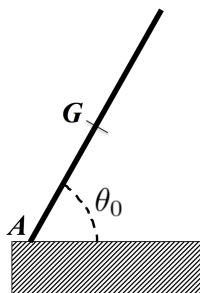
## Question 2 – Mechanics (++)

A solid sphere of mass  $m$  and radius  $r$  rolls down an inclined plane, without sliding. If the sphere starts from rest, what is its speed after its vertical height has decreased by an amount  $h$ ? The momentum of inertia for a solid sphere is  $I = 2mr^2/5$ .

- (a)  $\sqrt{gh}$
- (b)  $\sqrt{2gh}$
- (c)  $\sqrt{5gh}$
- (d)  $\sqrt{\frac{10}{7}gh}$
- (e)  $\sqrt{\frac{5}{2}gh}$

## Question 3 – Mechanics (+++)

A bar of length  $2\ell$ , mass  $m$  and moment of inertia  $J = \frac{1}{3}m\ell^2$ , is fixed to the ground at a point  $A$  (see figure). At time  $t = 0$ , the bar makes an angle  $\theta_0$  with respect to the ground. The initial speed of the center of mass of the bar is zero. We will suppose that the friction is so that the point  $A$  is fixed while the bar moves. What is the speed of the center of mass when the bar touches the ground?



- (a)  $v_G = \sqrt{\frac{3g\ell}{5} \sin \theta_0}$
- (b)  $v_G = \sqrt{\frac{3g}{2\ell} \sin \theta_0}$
- (c)  $v_G = \sqrt{\frac{2g\ell}{3} \sin \theta_0}$
- (d)  $v_G = \sqrt{\frac{3g\ell}{2} \cos \theta_0}$
- (e)  $v_G = \sqrt{\frac{3g\ell}{2} \sin \theta_0}$

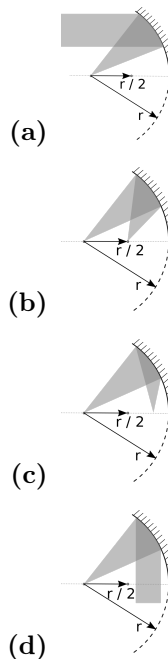
## Question 4 – Thermodynamics (+++)

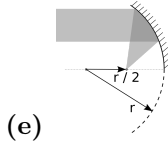
An air conditioner works in ideal condition to cool and to keep an amphitheater at temperature  $T_i = 300K$ . The external temperature is  $T_e = 330K$ . Suddenly, the lights of the amphitheater, whose total power is  $P = 1000W$ , are switched on. Which increment of power  $\Delta W$  the air conditioner must supply to keep the internal temperature of the amphitheater?

- (a)  $66W$
- (b)  $100W$
- (c)  $10W$
- (d)  $1000W$
- (e)  $30W$

## Question 5 – Optics (+++)

Consider a section of a spherical mirror close to its optical axis. Neglecting optical aberration, which of the following better describes the effect of this mirror on a beam of light?





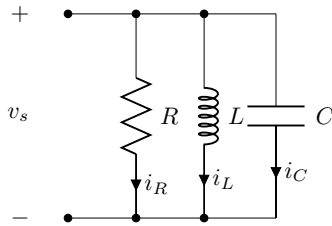
**Question 6 – Electromagnetism (+)**

Let us consider a cylinder of infinite length (along the axis  $y$ ), and with cross section of size  $a$  (along the axis  $x$  and  $z$ ). The walls of the cylinder are perfectly conductive, whereas the inside of the cylinder is empty and free of charge. Which equation does satisfy the electric potential  $V$  ?

- (a)  $V = 0$
- (b)  $\frac{\partial V}{\partial x} + \frac{\partial V}{\partial y} = 0$
- (c)  $\frac{\partial^2 V}{\partial x^2} + \frac{\partial^2 V}{\partial y^2} + \frac{\partial^2 V}{\partial z^2} = 0$
- (d)  $\frac{\partial V}{\partial x} + \frac{\partial V}{\partial y} + \frac{\partial V}{\partial z} = 0$
- (e)  $\frac{\partial^2 V}{\partial y^2} + \frac{\partial^2 V}{\partial z^2} = 0$

**Question 7 – Electrical engineering (+)**

Consider the circuit below, where  $R = 500 \Omega$ ,  $L = 500 \text{ mH}$  and  $C = 500 \text{ nF}$ . Suppose initial conditions  $v_C(0^-) = 5 \text{ V}$  and  $i_L(0^-) = 50 \text{ mA}$ . What is the initial value of  $\frac{dv}{dt}$ ?

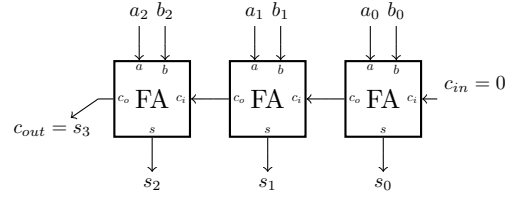


- (a)  $\frac{dv}{dt} = -240 \text{ kV/s}$
- (b)  $\frac{dv}{dt} = -120 \text{ kV/s}$
- (c)  $\frac{dv}{dt} = -150 \text{ kV/s}$
- (d)  $\frac{dv}{dt} = 120 \text{ kV/s}$
- (e)  $\frac{dv}{dt} = 240 \text{ kV/s}$

**Question 8 – Electrical engineering (+++)**

$M$ ,  $N$ ,  $O$  and  $P$  are numbers coded with two's complement using  $n = 4$  bits. Consider the implementation of  $X$ ,  $Y$  et  $Z$  below without overflow based on carry ripple adder (CRA) (cf. figure). Each full-adder (FA) has a propagation delay  $t_{FA} = 1 \text{ ns}$ . Suppose all bits of operands  $M$ ,  $N$ ,  $O$ ,  $P$  are ready at time  $t = 0 \text{ ns}$ . What is the minimal time  $t$  ensuring appropriate calculation of  $Z$ ?

- $X = M + N$
- $Y = X + O$
- $Z = Y + P$



- (a)  $t = 6 \text{ ns}$
- (b)  $t = 7 \text{ ns}$
- (c)  $t = 8 \text{ ns}$
- (d)  $t = 9 \text{ ns}$
- (e)  $t = 12 \text{ ns}$

**Question 9 – Quantum mechanics (+)**

In an infinite potential well of width  $a$ , the energy of the  $n$ -th quantum state is given by  $E_n = \frac{n^2 \pi^2 \hbar^2}{2ma^2}$ . If the particle in this quantum well is an electron,  $\frac{\pi^2 \hbar^2}{2m} \approx 400 \text{ meV nm}^2$ . For  $a = 20 \text{ nm}$ , what is the energy difference between the ground state and the first excited state of this electron?

- (a) 1 meV
- (b) 3 meV
- (c) 4 meV
- (d) 8 meV
- (e) 9 meV

**Question 10 – Quantum mechanics (+++)**

A hypothetical quantum system is described by a wave function of the form  $\varphi(x) = A(1 - x^2)$  if  $x \in (-1, 1)$  and  $\varphi(x) = 0$  outside this interval. What is the value of  $A$ ?

- (a) 15/16
- (b) 16/15
- (c)  $4/\sqrt{15}$
- (d)  $\sqrt{15}/4$
- (e) 1

# CHEMISTRY - Sample questions

## Question 1 – General chemistry (++)

In the case of this endothermic dissolution process  
 $\text{Ag}_2\text{CrO}_4(\text{s}) = 2\text{Ag}^+(\text{aq}) + \text{CrO}_4^{2-}(\text{aq})$   
which of these actions will shift the balance to the right?

- (a) Addition of NaCl, which causes the precipitation of AgCl
- (b) Pressure increase
- (c) Addition of  $\text{AgNO}_3$ , soluble in water
- (d) Addition of an excess of  $\text{Ag}_2\text{CrO}_4(\text{s})$
- (e) Temperature decrease

## Question 2 – General chemistry (+++)

A triacid of a  $\text{H}_3\text{A}$  type (with a molecular mass of  $M = 192 \text{ g. mol}^{-1}$ ) has the three following  $\text{pK}_a$ :

$\text{pK}_{a1} = 3.14$ ,  $\text{pK}_{a2} = 4.77$ ,  $\text{pK}_{a3} = 6.39$

21.4 g of sodium dihydrogenosel ( $\text{NaH}_2\text{A}$ ) plus 11.8 g of sodium monohydrogenosel ( $\text{Na}_2\text{HA}$ ) are dissolved in 1L of pure water (we will neglect volume variations here in order to always have a solution of 1L). What is the pH of the solution obtained?

$M(\text{Na}) = 23 \text{ g. mol}^{-1}$ ;  $M(\text{H}) = 1 \text{ g. mol}^{-1}$  ;

$\log\left(\frac{1}{2}\right) = -0,30$

- (a) 3.14
- (b) 3.96
- (c) 4.47
- (d) 4,77
- (e) 5.58

## Question 3 – General chemistry (+++)

Acetylene (ethyne  $\text{C}_2\text{H}_2$ ) is a gas that provides a very bright flame during combustion. It can be produced from the following reaction:

$\text{CaC}_2(\text{s}) + 2\text{H}_2\text{O}(\text{l}) = \text{Ca}(\text{OH})_2(\text{s}) + \text{C}_2\text{H}_2(\text{g})$

100 g of calcium carbide ( $\text{CaC}_2$ ) react with 100 mL of water ( $\text{H}_2\text{O}$ ). Considering that standard conditions, at 298 K, are respected, what is the exhaust volume of ethyne?

- (a) 20 L
- (b) 25 L
- (c) 30 L
- (d) 35 L
- (e) 50 L

Data

$\rho(\text{water}) = 1 \text{ kg.L}^{-1}$ ,  $M(\text{Ca}) = 40 \text{ g. mol}^{-1}$ ,  $M(\text{C}) = 12 \text{ g. mol}^{-1}$ ,  $M(\text{O}) = 16 \text{ g. mol}^{-1}$ ,  $M(\text{H}) = 1 \text{ g. mol}^{-1}$ ,  $R = 8.314 \text{ J. mol}^{-1}.\text{K}^{-1}$ .

## Question 4 – Analytical chemistry (++)

We have a 12% (weight/weight) aqueous solution of potassium hydroxide whose density is  $1.10 \text{ kg.L}^{-1}$ . What is the molar concentration of this solution ?

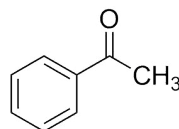
- (a) 23,5 M
- (b) 2,35 M
- (c) 1,32 M
- (d) 0,132 M
- (e) 0,12 M

Data

$M(\text{K}) = 39.1 \text{ g. mol}^{-1}$ ,  $M(\text{O}) = 16 \text{ g. mol}^{-1}$ ,  $M(\text{H}) = 1 \text{ g. mol}^{-1}$ .

## Question 5 – Organic chemistry (++)

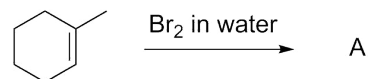
The following compound is a/an:

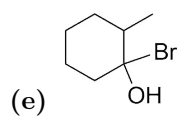
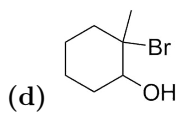
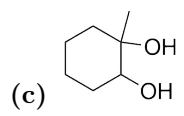
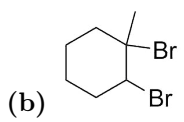
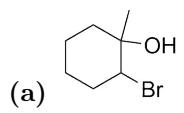


- (a) aldehyde
- (b) ketone
- (c) ether
- (d) ester
- (e) carboxylic acid

## Question 6 – Organic chemistry (+++)

What is the main compound A obtained by the following reaction ?





## LIFE SCIENCES - Sample questions

### Question 1 – Life Sciences (++)

Plants are regularly subjected to biotic attacks by bacteria, fungi, or viruses. Three plant hormones may be involved in intercellular signaling to activate defense responses in nearby cell sites of infection:

- (a) folic acid, defensins and polygalacturonases
- (b) progesterone, estradiol and testosterone
- (c) auxin, cytokinins and strigolactones
- (d) salicylic acid, ethylene and jasmonic acid
- (e) creatine, somatotropin and somatoliberin

### Question 2 – Life Sciences (+++)

RubisCO (Ribulose-1,5-diphosphate Carboxylase / Oxygenase) is a plant enzyme involved in the Calvin cycle and more particularly in the fixation of carbon dioxide. This Calvin cycle:

- (a) is an overall oxidation of pentoses
- (b) strictly works in the light
- (c) reduces both the carbon and oxygen assimilated
- (d) works in a synchronized manner with the Klein cycle
- (e) requires ATP and NADPH to cover the energy cost of reducing mineral carbon

### Question 3 – Life sciences (+++)

A so-called "orthodox" seed is:

- (a) an healthy seed, devoid of any pathogen
- (b) a seed displaying no dormancy
- (c) a seed with extremely low water content and in a quiescent metabolic state
- (d) a seed without embryo
- (e) a seed without endosperm

### Question 4 – Life sciences (+++)

Paul crossed an homozygous plant with red flowers with an homozygous plant with white flowers. He got a plant with red flowers. He then self-fertilized this plant and among the descendants of it, he counted 298 plants with red flowers and 102 plants with white flowers. That means:

- (a) selfing failed
- (b) the color of the flowers is determined by 1 gene with 2 alleles, the red allele being codominant with the white allele
- (c) the color of the flowers is determined by 1 gene with 2 alleles, the red allele being dominant on the white allele
- (d) the color of the flowers is determined by 2 genes, the first one coding for the red alleles, the second one for the white alleles
- (e) the starting plants were not homozygous